

Friday 22nd May
Daily activities

Daily Physical Activity

- On YouTube you can search for lots of different Just Dance videos.
- Why not select a few of your favourite songs and learn the routines for them?



Reading at home

You should still be aiming to read for *at least 20 minutes everyday*.

Remember, you can now take Accelerated Reader quizzes from home by using this link [Howley Grange Renaissance at home](#) and logging on as usual using your username and password.

To check that the book you are reading has a quiz, you can check it using on [Accelerated Reader Bookfinder](#). It's okay to read books which haven't got a quiz - just keep a record of what you have read.

Keep reading and exploring new worlds and adventures!

English

Year 4 Spring Term 2 Mat 6

6

a
Can you write the Daniel's words as an accurately-punctuated direct speech?



c
Mr Whoops has accidentally used three suffixes incorrectly. Fix the words by using the correct suffixes.

Housework isn't very enjoyable and because I'm quite clumsy, it is often dangeral. My clumsity can be a real problem!

_____	→	_____
_____	→	_____
_____	→	_____



e
Up-level this sentence by adding an adjective, an adverb and an extra subordinate clause!

The girl walked her dog in the park.

b
Can you think of a word that ends in **-ous** to match these definitions?

brave/heroic **c** _____

funny/amusing **h** _____

d
Fill the spaces with the correct word in brackets:

My painting is _____ than yours. (**best/better/gooder**)

The rainstorm was the _____ I'd ever seen. (**worse/baddest/worst**)

f
Insert the correct speech punctuation into these sentences:

The teacher shouted Time to go!

The reporter asked When did the incident occur?

Daily Spelling Practice

Year 3 and 4 Statutory Spellings

accident	caught	eighth	heard	minute	possible	strange
accidentally	centre	enough	heart	natural	potatoes	strength
actual	century	exercise	height	naughty	pressure	suppose
actually	certain	experience	history	notice	probably	surprise
address	circle	experiment	imagine	occasion	promise	therefore
answer	complete	extreme	increase	occasionally	purpose	though
appear	consider	famous	important	often	quarter	although
arrive	continue	favourite	interest	opposite	question	thought
believe	decide	February	island	ordinary	recent	through
bicycle	describe	forward	knowledge	particular	regular	various
breath	different	forwards	learn	peculiar	reign	weight
breathe	difficult	fruit	length	perhaps	remember	woman
build	disappear	grammar	library	popular	sentence	women
busy	early	group	material	position	separate	
business	earth	guard	medicine	possess	special	
calendar	eight	guide	mention	possession	straight	

Spelling practice looks slightly different this week as we don't want you to forget how to spell words from the Year 3 and 4 list and, more importantly, we also want to make sure you do some editing practice. Each day, there are 2 slides (following this one) which have spelling mistakes on them; the first slide identifies the word which is spelt wrong, whereas the second slide doesn't-this will be more of a challenge for some of you! If you usually start with 1 star work in English-I suggest attempting the first one only and if you're successful then you can always move on. Please don't stress yourselves out unnecessarily!

Your task each day is to correct or identify and correct each spelling mistake. There is space on the slide to rewrite the correct spelling but if you're unable to print out the slides then it is absolutely fine to jot the correct spelling on paper you have at home.

All of the words which you will need to correct are taken from the Year 3 and 4 spelling list (pictured left)-don't just copy them though!

Answers (as you know by now) are at the end of the presentation so that you can self mark (no cheating though!) and the idea, this week, is-once you've marked your answers, any spellings which you got wrong become the spellings for you to practise that day.

If you make lots of errors or are finding it too hard, go back through your spelling book and practise a few of those you've previously got wrong in a test instead.

There will be a slide each day to remind you of various ways to practise the words you're focusing on but the ideas are not exhaustive meaning that you can practise in other ways if you have other ideas.

Year 3 and 4 Correct the Spelling Mistake (4)

The spelling mistakes in these sentences have been circled. Write the correct spelling for each circled word in the box.

1. Put the date on the calindar or you might forget.
2. We are going swimming in cwarter of an hour.
3. The professor has a lot of knowlege about the planets and the universe.
4. I herd you had won the Under-12s League yesterday.
5. The bowler caurt the ball.
6. The bag seemed to apear like magic!
7. Mum didn't notiss as I had sneaked upstairs.
8. The strongman lifted the heaviest waght with no trouble at all.

Each sentence below has one word that is incorrect. Write the correct spelling of the word in the box.

1. It was achually my turn next.
2. That milk had a peckuliar taste.
3. Queen Victoria's raign lasted 64 years.
4. The horse would not go fourwards, only backwards!
5. That materyal feels so soft and silky.
6. I asked Dad if he would increese my pocket money. He said, "No!"
7. The number aight is between 7 and 9.
8. It was an orddinary day, when suddenly the sky went black.

Daily spelling practice-words you got wrong in the previous tasks.

You may choose to do one or each of the following to practise your focus words (the spellings you got wrong or lacked confidence with in the previous editing tasks).

1. Practise spelling them by using the strategy: Look, say, cover, write and check.
2. Jot down and make 2 copies of your focus words and ask someone in your house to play 'Snap!' Before you're able to win the pair of cards, you should close your eyes and have a go at spelling the word.
3. Use the focus words you've made. Turn them all over face-down and play matching pairs. Turn over 1 card at a time and attempt to find the one that matches!
4. Make a mnemonic to help you remember how to spell the word (the sillier the better!) e.g. People= **p**eople **e**at **o**ranges **p**igs **l**ike **e**ggs!
5. You could write each letter in a different colour (rainbow writing).
6. Create a word pyramid - s

sc

sci

scie

scien

scienc

science

7. Describe the word to an adult or sibling-you could tell them the word class, what it means but you **must not** say the word!

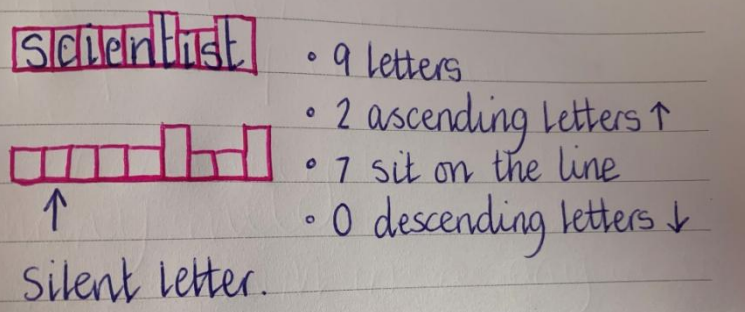
8. Try drawing around the word to help you remember how many letters and the shape of them (see bottom left).

9. You could play 'Hangman' with people in your house-make sure you're accurate when you tell them which letters are/aren't in your chosen words!

10. Write the word backwards.

11. If you have chalk available, write your focus words on the floor to create 'Hopscotch' and when you land on a given word, close your eyes and spell it aloud.

12. Say each letter in turn as you go upstairs or when bouncing on the trampoline (if you have one).



Maths

The first individual leader board will be shared on Monday and this time next week we will share which class has the most children in the top 10!

We understand that you may not be able to get involved online and are practising your tables in other ways e.g. completing paper booklets, chanting them, saying them as you go up the stairs etc. -that is absolutely fine too!

But if you are able to get involved, we'd love as many of you to do so as possible.

Aim to spend 15 minutes each day practising your times tables and associated division facts- we don't mind how you do it but we don't want you to forget them as they will help you for the rest of your lives!



10-4-10

Complete in the same way as we do in school. Aim to complete as many questions as you can in 10 minutes. Miss them out if you're spending too long thinking about how to tackle them. You don't need to write the question. Only show your workings if you need to. You should use the squares in your Maths homework book as this will help you set out any written methods.

1. Write 9 hundredths as a decimal.
2. How many 2 pence coins in £1.50?
3. Round 875 to the nearest 10.
4. $4 \times \underline{\quad} = 6 \times 8$
5. Round 1092 to the nearest 100.
6. How much change will I get from £20 if I spend £12.74?
7. $567 \times 3 =$
8. If a programme starts at 20:30 and lasts an hour and 25 minutes, what time does the programme finish? Put your answer in 24 hour clock.
9. James has saved £15.25. He wants to buy a new game that costs £45.00. How much more does he need to save?
10. $0.58 + 1.16 =$

Extension

11. $1.08 \times 100 =$
12. Write a three quarters as a decimal.
13. $1043 \div 10 = 400 - \underline{\quad}$
14. $0.75 + \underline{\quad} = 5$
15. $£6.27 + £7.49 =$
16. Change 2:34pm into 24 hour clock.
17. Round 378 to the nearest 10 and 1,803 to the nearest 100. Add the answers together.
18. A journey finished at 5:30pm. It lasted 2 hours and 10 minutes. What time did the journey start?
19. Round 6,072 to the nearest 10, 100 and 1000.
20. If I count in 4's from 0, will I say 208?

W.A.L.T: consolidate out understanding of how to solve problems involving time.

If you have completed the previous maths activities set for you last week and this week then you should have further developed your understanding of different units of time and how to convert between them. Today's task is to apply this knowledge to solve problems written in words.

Don't be confused by the words-you've got this!

Think about the **RISE** strategy which we use in school to solve problems. **Recognise**-what do you already know that will help you? E.g. 30 minutes in half an hour. **Identify**-underline/highlight key information, which operation do you need to do? Which words give you clues? Is there more than one step? Etc.

On the following slide you will find a couple of modelled examples which I've done for you-hopefully they will help.

On the next but one slide there are some starred worksheets for you to have a go at. Start with the star you often start on, in maths, and then you can always continue on if you feel confident but do not pressure yourself to.

Modelled examples:

Time Word Problem Challenge Cards

Christina spent 35 minutes writing in her diary. If she finished writing at 8:15 p.m., when did she start?



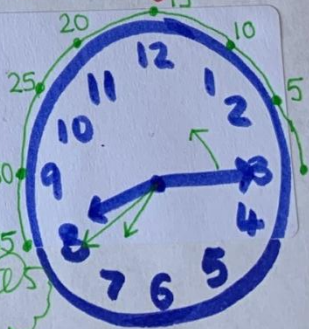
• I know that the time she started (my answer) can't be after/after later than 8:15 p.m.

• I know that each digit on an analogue clock represents 5 minutes.

• I'm going to count back in 5's until I say 35 minutes. I'm going to start at 8:15.

• I haven't got a clock in my hand so I'll draw one - I know how to show 8:15.

Answer: 7:40 p.m. or twenty minutes to eight.



Time Word Problem Challenge Cards

Edward needed 25 minutes to bake some cookies and 50 minutes to bake some brownies. If he began baking at 7:30 p.m., when would he finish?



- Answer has to be after 7:30 p.m. - his start time.
- and tells me I need to add +.
- 60 minutes = 1 hour.

$$25 + 50 = 75 \text{ minutes (total baking time)}$$

- Add 75 minutes on to 7:30 p.m.


How many lots of 60 in 75? 1 whole hour and 15 minutes.

- Move clock hands 1 hour and 15 minutes from 7:30 p.m.

$$7:30 \text{ p.m.} + 1 \text{ hour} = 8:30 \text{ p.m.}$$

$$8:30 \text{ p.m.} + 15 \text{ minutes} = 8:45 \text{ p.m.}$$

Answer: 8:45 p.m. or 20:45 p.m.



Questions used with the kind permission of Twinkl Educational Publishing (c) Twinkl Ltd 2019.

Helpful hint:

- Draw clocks if you need to.
- Count hours first.



1. Thomas visits a local farm. He arrives at 9am and spends 2 hours there. What time did he leave?
2. One sunny day, Class 3 go outside at 1pm to play rounders. They go back inside after 1 hour. When do they come inside?
3. Mr Davies goes on a bike ride. He says goodbye to his family at 10am and returns at 2pm. How long was he cycling for?
4. Henry gets a party invitation. It starts at 3pm and ends at 6pm. How long will the party be?
5. Tina gets home from school at 4pm and begins to read her new book. She puts it down to eat her dinner at 5pm. How long was she reading for?
6. Ben and Ahmed meet outside the fair at 2pm. Ben's mum picks them up at 5pm. How much time did they spend there?
7. A football match starts at 11am and is cancelled due to bad weather after an hour. What time is the match cancelled?
8. A train journey to the nearest city takes 2 hours. I get the train at 3pm. What time do I arrive?
9. Harry arranges to chat online to a school friend at 5pm. His friend messages to say he'll be an hour late. What time will they chat now?
10. Cricket practice begins at 5pm and ends at 7pm. How long is practice?



Questions 7, 8 and 9 are particularly tricky-don't stress yourselves out if you can't do them.

Helpful hints:

•Remember the rhyme from last week's presentation...**30 days in September, April June and November etc.** If you didn't learn it, go back and look at Slide 12 in last Tuesday's (12.05.20) presentation to remind yourselves as this will help.

1. Billy's football match kicked off at 3.30pm and the first half lasted 45 minutes. What time was half time?
2. The new play at the theatre finished at 5.15pm. It lasted 2½ hours. What time will it start?
3. The sponsored swim begins at 10.30am and Rose has pledged to swim non-stop for 15 minutes. What time will she finish?
4. Class 1 get 10 minutes extra playtime. How long is that in seconds?
5. Rosie times herself reading a chapter of her new book and records 300 seconds. How many minutes is that?
6. Josh bounces a tennis ball on a racket for 180 seconds. How many minutes can Josh keep the ball on the racket?
7. How many days are there in January, February and March in a leap year?
8. How many days are there between July 1st and December 31st, inclusive?
9. If Abi goes on holiday for the whole of July and August, how many days is she away in total?
10. Tom's recipe said to bake the cake for 45 minutes. He needs it out of the oven for 11.30am. What time should he put it in?



Questions 5 and 6 are particularly tricky-don't stress yourselves out if you can't do them.

Helpful hints:

- Read the entire question first.
- Re-read the question again before jotting down the duration of time in each sentence-remember to take notice of the full stops.

1. Jamie is making bookmarks to sell for charity. Each bookmark takes 8 minutes to make. How many bookmarks can he make in one hour?
2. Steven wants to watch Doctor Who at 4.20pm. His new watch shows the 24 hour clock. What time should he look for on the display?
3. Megan celebrates her 60th birthday on Saturday. How many decades has she been alive?
4. A postman starts his shift at 05:30 and finishes at 08:45. After his break, he starts his again at 12:30 and finishes at 14:15. How long does he actually work for?
5. Justin looks at his watch as he leaves Heathrow airport at 6am to go to Australia. His flight to Hong Kong take 22½ hours. They then have a delay for ¾ hours to refuel before setting off again for the remaining 9 hour flight. What time does his watch say when he arrives?
6. Ros has lots of homework to do. She starts reading at 3.32pm and ends at 3.55pm. After a drink she does her maths from 4.12pm until 5.07pm. After her dinner, she then learns her spellings from 6.34pm to 7.05pm. How long has she spent on homework in total?
7. Houston, Texas, USA is 6 hours behind our time in summer. It is 15:15 here, so what time is it there?
8. Jenny walks the length of the school field. It takes her 4 minutes. How many times could she do this in an hour?
9. In a history book it says a battle lasted for two decades. How many years is this?
10. The local artist has the job of painting a wall with a map of the town. She says it will take 2 days and 11 hours to complete. She starts on Monday at 8am. When should she finish?

PSHE

KS2 Relationships: Our Special People



Home Learning: Friends and family



We are learning about what is important in friendships and family relationships

We will be able to:

- ✓ identify the qualities of positive friendships and family relationships
- ✓ explain how friends and family show they care for and value each other
- ✓ describe what is most important in a friendship or family relationship
- ✓ recognise that friendships and family relationships may change for different reasons and how to manage this

What's our starting point?

Draw and write

Draw or write about what is most important in a friendship or family relationship?



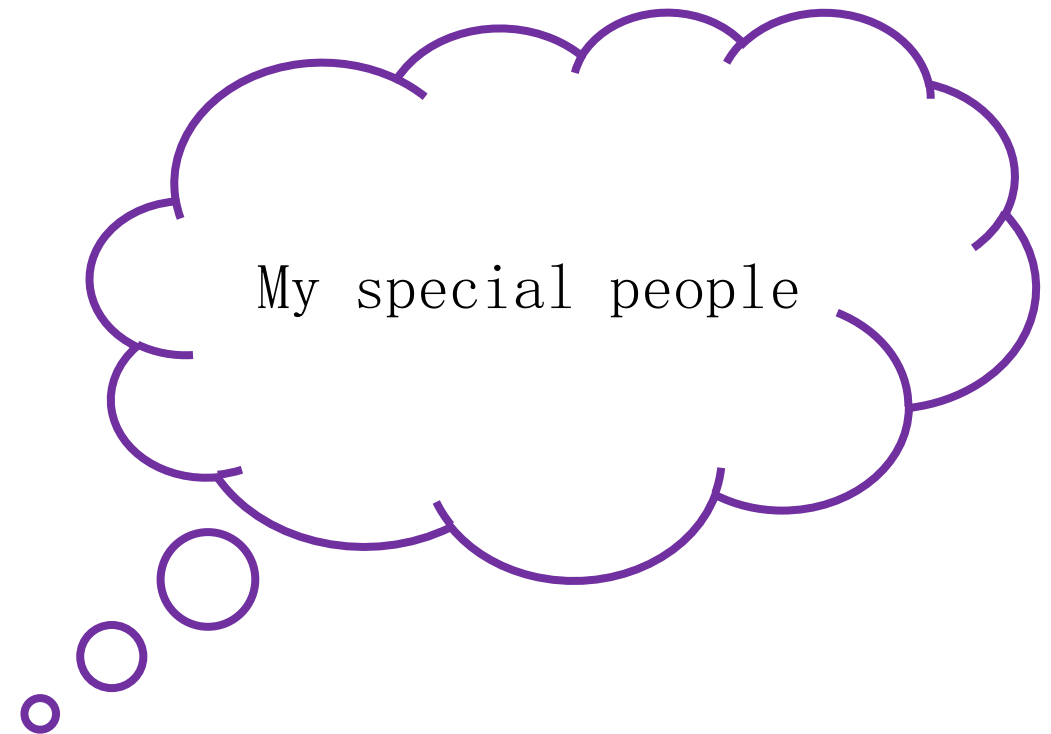
Special people

Think about the special people in your life (people you know well).

What do they do that makes them special to you?

Make a brainstorm, mind-map or word cloud about special people.

You don't have to name anyone, but think about your own special people as you do this activity.



Answers

Year 4 Spring Term 2 Mat 6 Answers

6

a
Can you write the Daniel's words as an accurately-punctuated direct speech?



Accept accurate speech punctuation, e.g. "Catch!" shouted Daniel as he threw the ball.

b
Can you think of a word that ends in **-ous** to match these definitions?

brave/heroic **courageous**

funny/amusing **humorous**

c
Mr Whoops has accidentally used three suffixes incorrectly. Fix the words by using the correct suffixes.

Housework isn't very enjoyable and because I'm quite clumsy, it is often dangeral. My clumsity can be a real problem!

enjoyful	→	enjoyable
dangeral	→	dangerous
clumsity	→	clumsiness

d
Fill the spaces with the correct word in brackets:

My painting is better than yours. (**best/better/gooder**)

The rainstorm was the worst I'd ever seen. (**worse/baddest/worst**)



e
Up-level this sentence by adding an adjective, an adverb and an extra subordinate clause!

Accept an up-levelled sentence with an added adjective, adverb and subordinate clause, e.g. **As it was a beautiful day, the carefree girl walked her dog happily in the park.**

f
Insert the correct speech punctuation into these sentences:

The teacher shouted, "Time to go!"

The reporter asked, "When did the incident occur?"

Year 3 and 4 Correct the Spelling Mistake (4) Answers

Used with the kind permission of Twinkl Educational Publishing
(c) Twinkl Ltd 2019.

The spelling mistakes in these sentences have been circled. Write the correct spelling for each circled word in the box.

1. Put the date on the calindar or you might forget.
2. We are going swimming in cwarter of an hour.
3. The professor has a lot of knowlege about the planets and the universe.
4. I herd you had won the Under-12s League yesterday.
5. The bowler caurt the ball.
6. The bag seemed to apeear like magic!
7. Mum didn't notiss as I had sneaked upstairs.
8. The strongman lifted the heaviest waght with no trouble at all.

calendar
quarter
knowledge
heard
caught
appear
notice
weight

Each sentence below has one word that is incorrect. Write the correct spelling of the word in the box.

1. It was achually my turn next.
2. That milk had a peckuliar taste.
3. Queen Victoria's raign lasted 64 years.
4. The horse would not go fourwards, only backwards!
5. That materyal feels so soft and silky.
6. I asked Dad if he would increese my pocket money. He said, "No!"
7. The number aight is between 7 and 9.
8. It was an orddinary day, when suddenly the sky went black.

actually
peculiar
reign
forwards
material
increase
eight
ordinary

10-4-10 **Answers**

1. Write 9 hundredths as a decimal.
0.09
2. How many 2 pence coins in £1.50?
75
3. Round 875 to the nearest 10. **880**
4. $4 \times \mathbf{12} = 6 \times 8$
5. Round 1092 to the nearest 100.
1,100
6. How much change will I get from £20 if I spend £12.74? **£7.26**
7. $567 \times 3 = \mathbf{1,701}$
8. If a programme starts at 20:30 and lasts an hour and 25 minutes, what time does the programme finish? Put your answer in 24 hour clock. **21:55**
9. James has saved £15.25. He wants to buy a new game that costs £45.00. How much more does he need to save? **£29.75**
10. $0.58 + 1.16 = \mathbf{1.74}$

Extension

11. $1.08 \times 100 = \mathbf{108}$
12. Write a three quarters as a decimal.
0.75
13. $1043 \div 10 = 400 - \mathbf{295.7}$
14. $0.75 + \mathbf{4.25} = 5$
15. $\pounds 6.27 + \pounds 7.49 = \mathbf{\pounds 13.76}$
16. Change 2:34pm into 24 hour clock.
14:34
17. Round 378 to the nearest 10 and 1,803 to the nearest 100. Add the answers together. **2,180**
18. A journey finished at 5:30pm. It lasted 2 hours and 10 minutes. What time did the journey start? **3:20pm**
19. Round 6,072 to the nearest 10, 100 and 1000. **6,070, 6,100, 6,000**
20. If I count in 4's from 0, will I say 208? **Yes, because 208 divided by 4 is 52**



Answers

1. Thomas visits a local farm. He arrives at 9am and spends 2 hours there. What time did he leave? **11am**
2. One sunny day, Class 3 go outside at 1pm to play rounders. They go back inside after 1 hour. When do they come inside? **2pm**
3. Mr Davies goes on a bike ride. He says goodbye to his family at 10am and returns at 2pm. How long was he cycling for? **4 hours**
4. Henry gets a party invitation. It starts at 3pm and ends at 6pm. How long will the party be? **3 hours**
5. Tina gets home from school at 4pm and begins to read her new book. She puts it down to eat her dinner at 5pm. How long was she reading for? **1 hour**
6. Ben and Ahmed meet outside the fair at 2pm. Ben's mum picks them up at 5pm. How much time did they spend there? **3 hours**
7. A football match starts at 11am and is cancelled due to bad weather after an hour. What time is the match cancelled? **12pm**
8. A train journey to the nearest city takes 2 hours. I get the train at 3pm. What time do I arrive? **5pm**
9. Harry arranges to chat online to a school friend at 5pm. His friend messages to say he'll be an hour late. What time will they chat now? **6pm**
10. Cricket practice begins at 5pm and ends at 7pm. How long is practice? **2 hours**



Answers

1. Billy's football match kicked off at 3.30pm and the first half lasted 45 minutes. What time was half time? **4.15pm**
2. The new play at the theatre finished at 5.15pm. It lasted 2½ hours. What time will it start? **2.45pm**
3. The sponsored swim begins at 10.30am and Rose has pledged to swim non-stop for 15 minutes. What time will she finish? **10.45am**
4. Class 1 get 10 minutes extra playtime. How long is that in seconds? **600 seconds**
5. Rosie times herself reading a chapter of her new book and records 300 seconds. How many minutes is that? **5 minutes**
6. Josh bounces a tennis ball on a racket for 180 seconds. How many minutes can Josh keep the ball on the racket? **3 minutes**
7. How many days are there in January, February and March in a leap year? **91 days**
8. How many days are there between July 1st and December 31st, inclusive? **184 days**
9. If Abi goes on holiday for the whole of July and August, how many days is she away in total? **62 days**
10. Tom's recipe said to bake the cake for 45 minutes. He needs it out of the oven for 11.30am. What time should he put it in? **10.45am**



Answers

1. Jamie is making bookmarks to sell for charity. Each bookmark takes 8 minutes to make. How many bookmarks can he make in one hour? **7**
2. Steven wants to watch Doctor Who at 4.20pm. His new watch shows the 24 hour clock. What time should he look for on the display? **16:20**
3. Megan celebrates her 60th birthday on Saturday. How many decades has she been alive? **6**
4. A postman starts his shift at 05:30 and finishes at 08:45. After his break, he starts his again at 12:30 and finishes at 14:15. How long does he actually work for? **5 hours**
5. Justin looks at his watch as he leaves Heathrow airport at 6am to go to Australia. His flight to Hong Kong take 22½ hours. They then have a delay for ¾ hours to refuel before setting off again for the remaining 9 hour flight. What time does his watch say when he arrives? **4.45pm**
6. Ros has lots of homework to do. She starts reading at 3.32pm and ends at 3.55pm. After a drink she does her maths from 4.12pm until 5.07pm. After her dinner, she then learns her spellings from 6.34pm to 7.05pm. How long has she spent on homework in total? **1 hour 49 minutes**
7. Houston, Texas, USA is 6 hours behind our time in summer. It is 15:15 here, so what time is it there? **09:15**
8. Jenny walks the length of the school field. It takes her 4 minutes. How many times could she do this in an hour? **15 times**
9. In a history book it says a battle lasted for two decades. How many years is this? **20 years**
10. The local artist has the job of painting a wall with a map of the town. She says it will take 2 days and 11 hours to complete. She starts on Monday at 8am. When should she finish? **Wednesday at 19:00 or 7pm**